


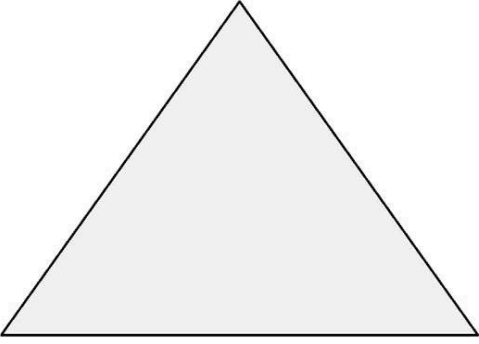
Konu Testleri

Düzlem Bilgisi



1-Yukarıdaki düzlemsel bölgeler ile hangi geometrik şekil oluşturulur?


- A)Koni B) Silindir C) Küre



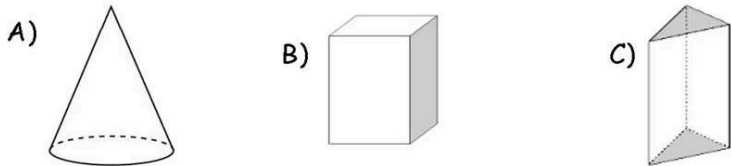
2-Yandaki şekillerde hangi düzlemsel bölge örneği yoktur?

- A)Üçgensel Bölge
B) Karesel Bölge
C) Dairesel Bölge

3- Aşağıdaki cisimlerin hangisinin yüzeyinde daire bulunur?





4-Aşağıda verilen geometrik cisimlerin hangisinin dikdörtgensel bölgesi yoktur?



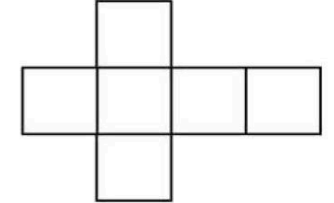
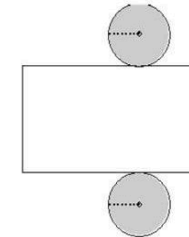
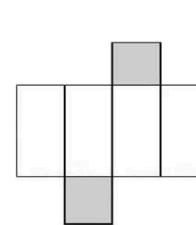
5-Aşağıdaki ifadelerden doğru olanların başına (D), yanlış olanların başına (Y) koyunuz.

- () Eni ve boyu olan, sınırsız bir biçimde uzayan, kalınlığı ve genişliği olmayan, iki boyutlu hayali bölgeye düzlemdir.
() Duvarın yüzeyindeki pano düzlemdir.
() Sınırlı düz yüzeylerin parçalarına düzlem parçası denir.
() Düzlem parçalarının şekline düzlemsel şekil denir.
() Düzlemin belli bir sınırı vardır.
() Halıdaki desenler düzlemsel şekildir.

6- Aşağıda verilen varlıklardan yüzeyi eğri olanlara *E, düz yüzey olanlara *D, yazınız?

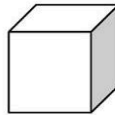



7- Aşağıdakilerden hangisi küpün açılımıdır?

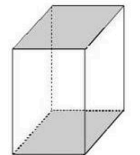
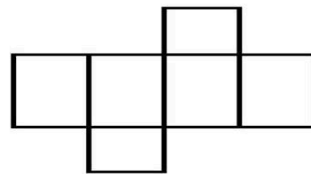
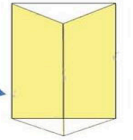
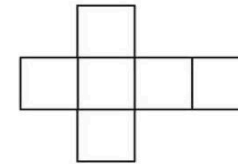
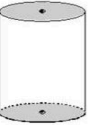
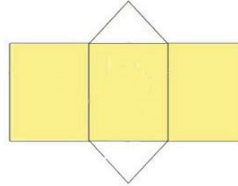
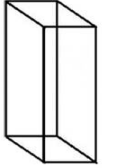
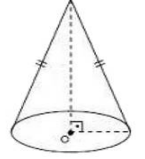
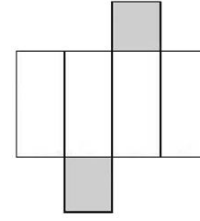
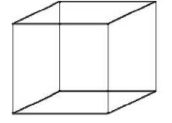
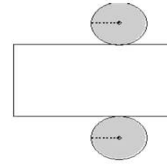


Konu Testleri

8- Aşağıdaki şekillerden düz yüze sahip olanları işaretleyiniz.



9- Aşağıdaki açılımı verilen modellerin örnekteki gibi birleştirilmiş hali ile eşleştirip altına adını yazınız.



Üçgen Pirizma

www.konutestleri.com