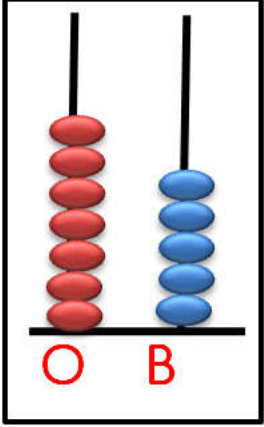
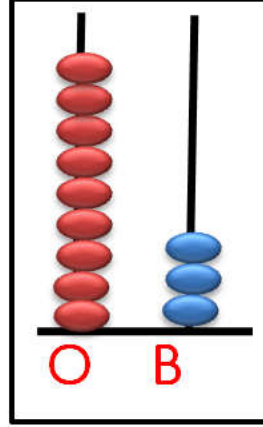


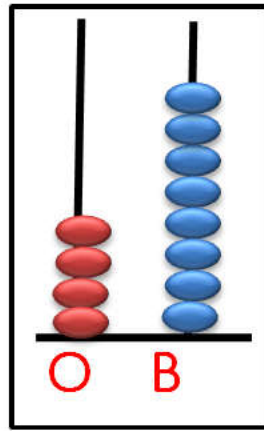
1. Abaküslerde verilen sayıları bulup okunuşunu yazalım.



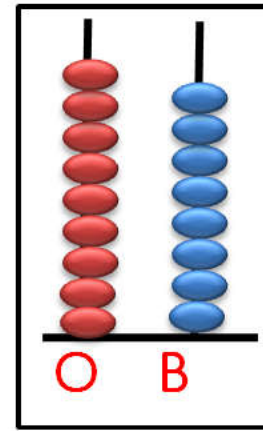
Sayı :.....
Okunuşu:



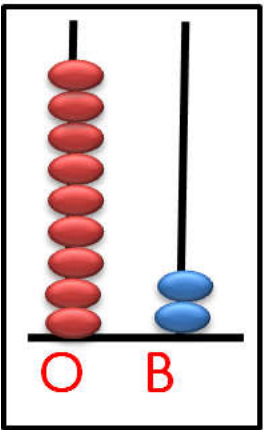
Sayı :.....
Okunuşu:



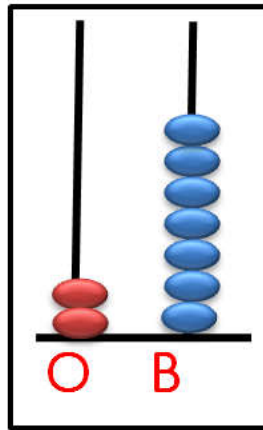
Sayı :.....
Okunuşu:



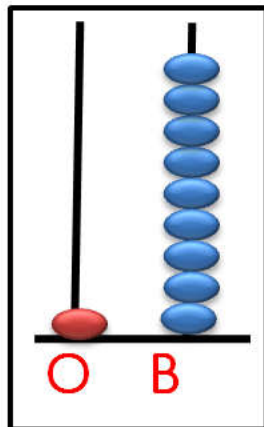
Sayı :.....
Okunuşu:



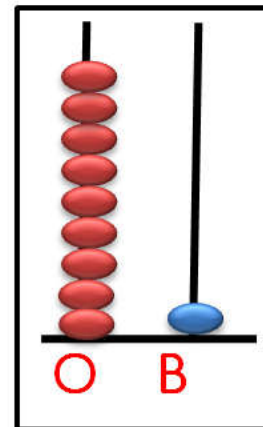
Sayı :.....
Okunuşu:



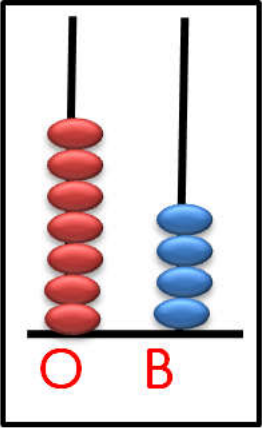
Sayı :.....
Okunuşu:



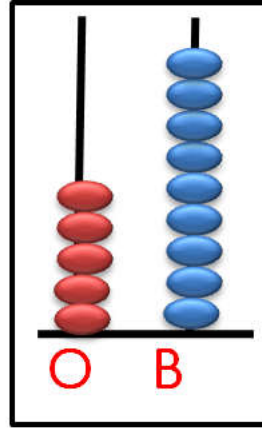
Sayı :.....
Okunuşu:



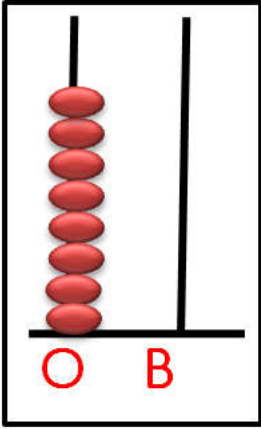
Sayı :.....
Okunuşu:



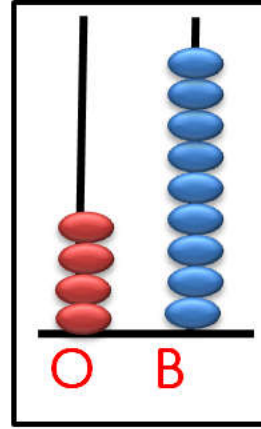
Sayı :.....
Okunuşu:



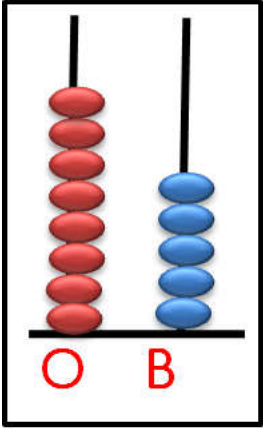
Sayı :.....
Okunuşu:



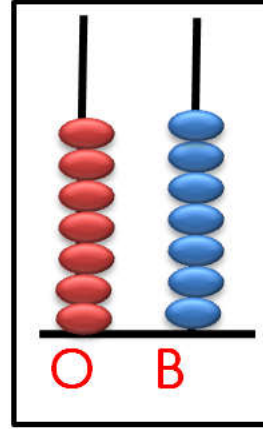
Sayı :.....
Okunuşu:



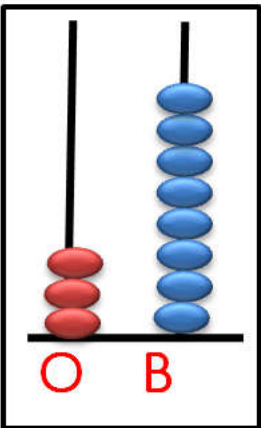
Sayı :.....
Okunuşu:



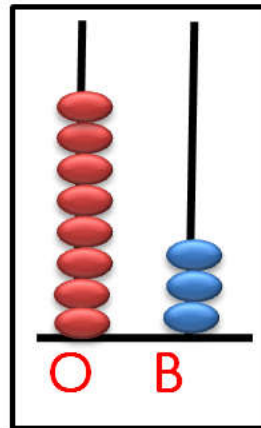
Sayı :.....
Okunuşu:



Sayı :.....
Okunuşu:



Sayı :.....
Okunuşu:



Sayı :.....
Okunuşu: