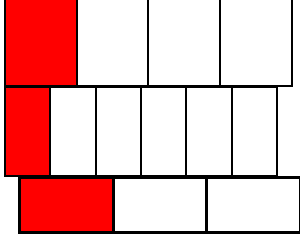


İnteraktif Eğitim  
Kesirlerde Karşılaştırma -2-

1. Aşağıdaki kesirleri karşılarındaki şekillerde gösterip karşılaştırınız ve örnekteki gibi büyükten küçüğe doğru sıralayınız.

$\frac{1}{4}$   
 $\frac{1}{6}$   
 $\frac{1}{3}$



$$\frac{1}{3} > \frac{1}{4} > \frac{1}{6}$$

$\frac{1}{8}$   
 $\frac{1}{4}$   
 $\frac{1}{3}$

Empty rectangular boxes for drawing the fractions  $\frac{1}{8}$ ,  $\frac{1}{4}$ , and  $\frac{1}{3}$ .

.....> ..... >.....

$\frac{1}{6}$   
 $\frac{1}{12}$   
 $\frac{1}{9}$

Empty rectangular boxes for drawing the fractions  $\frac{1}{6}$ ,  $\frac{1}{12}$ , and  $\frac{1}{9}$ .

.....> ..... >.....

$\frac{1}{15}$   
 $\frac{1}{12}$   
 $\frac{1}{9}$

Empty rectangular boxes for drawing the fractions  $\frac{1}{15}$ ,  $\frac{1}{12}$ , and  $\frac{1}{9}$ .

.....> ..... >.....

$\frac{1}{11}$   
 $\frac{1}{15}$   
 $\frac{1}{13}$

Empty rectangular boxes for drawing the fractions  $\frac{1}{11}$ ,  $\frac{1}{15}$ , and  $\frac{1}{13}$ .

.....> ..... >.....

$\frac{1}{8}$   
 $\frac{1}{10}$   
 $\frac{1}{6}$


Empty rectangular boxes for drawing the fractions  $\frac{1}{8}$ ,  $\frac{1}{10}$ , and  $\frac{1}{6}$ .

.....> ..... >.....

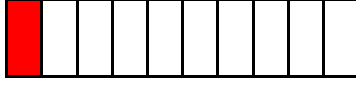


2. Aşağıdaki kesirleri karşılarındaki şekillerde gösterip karşılaştırınız ve örnekteki gibi küçükten büyüğe doğru sıralayınız.

$$\frac{1}{7}$$



$$\frac{1}{10}$$



$$\frac{1}{5}$$



$$\frac{1}{10} < \frac{1}{7} < \frac{1}{5}$$

$$\frac{1}{5}$$

$$\frac{1}{9}$$

$$\frac{1}{7}$$

$$\dots < \dots < \dots$$

$$\frac{1}{2}$$

$$\frac{1}{5}$$

$$\frac{1}{6}$$

$$\dots < \dots < \dots$$

$$\frac{1}{8}$$

$$\frac{1}{10}$$

$$\frac{1}{6}$$

$$\dots < \dots < \dots$$

$$\frac{1}{8}$$

$$\frac{1}{4}$$

$$\frac{1}{3}$$

$$\dots < \dots < \dots$$

$$\frac{1}{8}$$

$$\frac{1}{10}$$

$$\frac{1}{12}$$

$$\dots < \dots < \dots$$

