

## Konu Testleri

### Sembollerle Gösterelim Değerlendirme Testi



1. Yandaki şekil hangi devre elemanıdır?

- A) Ampul
- B) Anahtar
- C) Pil
- D) Kablo



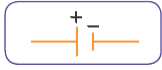
2. Yandaki şekil hangi devre elemanıdır?

- A) Ampul
- B) Anahtar
- C) Pil
- D) Kablo



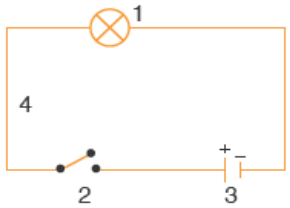
3. Yandaki şekil hangi devre elemanıdır?

- A) Ampul
- B) Anahtar
- C) Pil
- D) Kablo



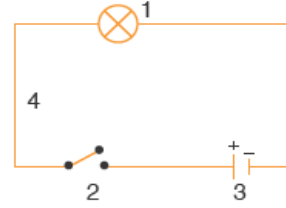
4. Yandaki şekil hangi devre elemanıdır?

- A) Ampul
- B) Anahtar
- C) Pil
- D) Kablo



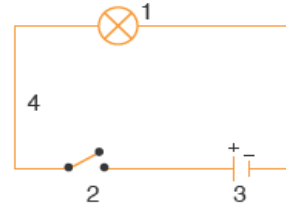
5. Yandaki devrede 4 numaralı devre elemanı hangisidir?

- A) Ampul
- B) Anahtar
- C) Pil
- D) Kablo



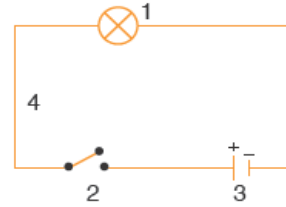
6. Yandaki devrede 2 numaralı devre elemanı hangisidir?

- A) Ampul
- B) Anahtar
- C) Pil
- D) Kablo



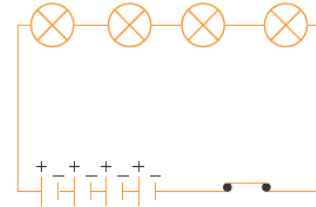
7. Yandaki devrede 3 numaralı devre elemanı hangisidir?

- A) Ampul
- B) Anahtar
- C) Pil
- D) Kablo



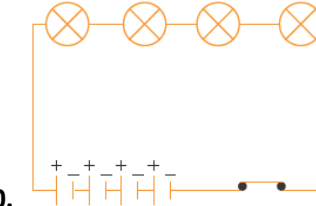
8. Yandaki devrede 1 numaralı devre elemanı hangisidir?

- A) Ampul
- B) Anahtar
- C) Pil
- D) Kablo



9. Yandaki elektrik devresinde kaç tane ampul vardır?

- A) 1
- B) 2
- C) 3
- D) 4



10. Yandaki elektrik devresinde kaç tane pil vardır?

- A) 1
- B) 2
- C) 3
- D) 4