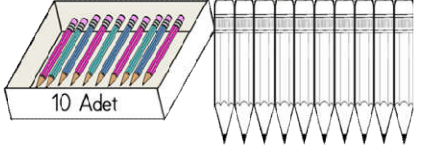


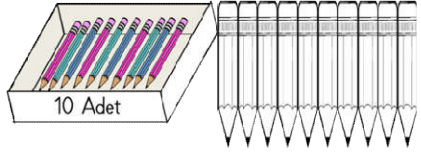
TOPLAMA İŞLEMİNDE VERİLMİYENİ BULMA -3-



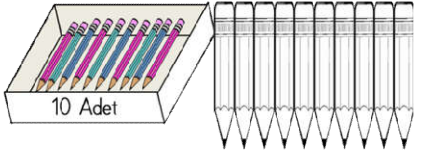
Aşağıdaki resimlerde kutularda bulunan kalem sayısı verilmiştir. Toplam kalem sayılarına ulaşmak için eklenecek kalemleri boyayınız. Verilmeyenleri yazınız.



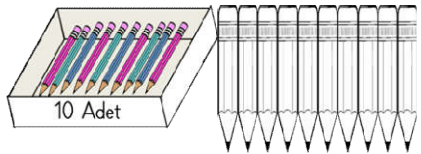
$$10 + \dots = 17$$



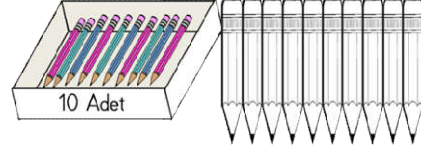
$$10 + \dots = 15$$



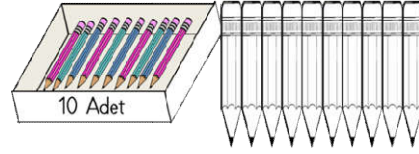
$$10 + \dots = 19$$



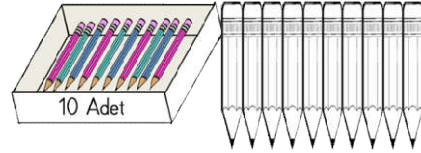
$$10 + \dots = 12$$



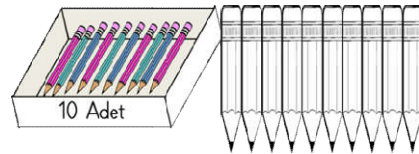
$$10 + \dots = 18$$



$$10 + \dots = 13$$



$$10 + \dots = 16$$

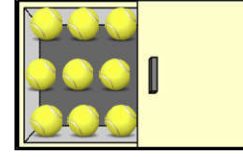


$$10 + \dots = 20$$

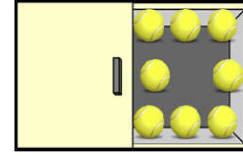
İnteraktif Eğitim



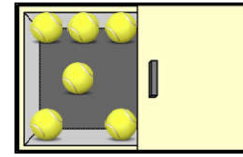
Aşağıdaki toplama işlemlerinde kutulardaki top sayıları toplam olarak verilmiştir. Kapalı kutulardaki top sayılarını bularak yazınız.



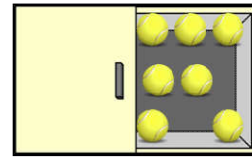
$$9 + \dots = 16$$



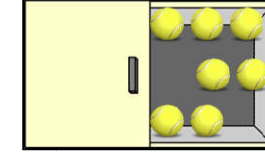
$$\dots + 8 = 15$$



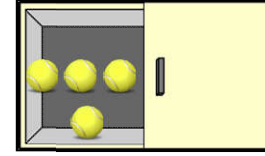
$$6 + \dots = 14$$



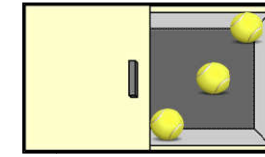
$$\dots + 7 = 16$$



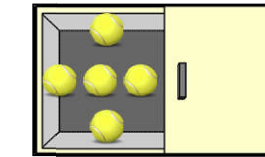
$$\dots + 7 = 12$$



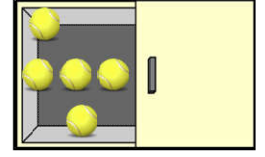
$$4 + \dots = 12$$



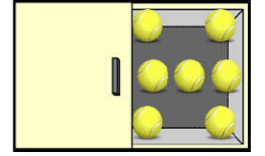
$$\dots + 3 = 12$$



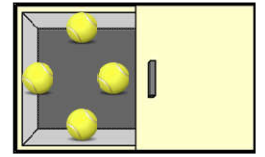
$$5 + \dots = 14$$



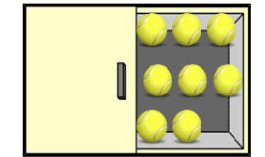
$$5 + \dots = 13$$



$$\dots + 7 = 11$$



$$4 + \dots = 13$$



$$\dots + 8 = 16$$



Aşağıdaki toplama işlemlerinde verilmeyen toplananları bulunuz.

$$\boxed{9} + \boxed{} = 18$$

$$\boxed{3} + \boxed{} = 10$$

$$\boxed{13} + \boxed{} = 16$$

$$\boxed{4} + \boxed{} = 5$$

$$\boxed{2} + \boxed{} = 9$$

$$\boxed{2} + \boxed{} = 9$$

$$\boxed{10} + \boxed{} = 14$$

$$\boxed{10} + \boxed{} = 17$$

$$\boxed{4} + \boxed{} = 7$$

$$\boxed{3} + \boxed{} = 19$$

$$\boxed{3} + \boxed{} = 16$$

$$\boxed{3} + \boxed{} = 6$$

$$\boxed{14} + \boxed{} = 17$$

$$\boxed{5} + \boxed{} = 15$$

$$\boxed{3} + \boxed{} = 9$$

$$\boxed{} + \boxed{3} = 6$$

$$\boxed{} + \boxed{4} = 13$$

$$\boxed{} + \boxed{1} = 6$$

$$\boxed{} + \boxed{5} = 10$$

$$\boxed{} + \boxed{9} = 18$$

$$\boxed{} + \boxed{7} = 20$$

$$\boxed{} + \boxed{4} = 6$$

$$\boxed{} + \boxed{1} = 19$$

$$\boxed{} + \boxed{2} = 17$$

$$\boxed{} + \boxed{11} = 15$$

$$\boxed{} + \boxed{1} = 9$$

$$\boxed{} + \boxed{1} = 5$$

$$\boxed{} + \boxed{4} = 13$$

$$\boxed{} + \boxed{13} = 14$$

$$\boxed{} + \boxed{9} = 18$$

İnteraktif Eğitim

$$\boxed{} + \boxed{12} = 16$$

$$\boxed{} + \boxed{3} = 8$$

$$\boxed{6} + \boxed{} = 13$$

$$\boxed{} + \boxed{8} = 18$$

$$\boxed{} + \boxed{3} = 7$$

$$\boxed{2} + \boxed{} = 15$$

$$\boxed{} + \boxed{8} = 12$$

$$\boxed{8} + \boxed{} = 20$$

$$\boxed{7} + \boxed{} = 20$$

$$\boxed{} + \boxed{10} = 15$$

$$\boxed{} + \boxed{7} = 12$$

$$\boxed{15} + \boxed{} = 16$$

$$\boxed{} + \boxed{6} = 13$$

$$\boxed{} + \boxed{4} = 18$$

$$\boxed{6} + \boxed{} = 12$$

$$\boxed{3} + \boxed{} = 13$$

$$\boxed{} + \boxed{7} = 16$$

$$\boxed{8} + \boxed{} = 12$$

$$\boxed{} + \boxed{5} = 16$$

$$\boxed{} + \boxed{4} = 15$$

$$\boxed{3} + \boxed{} = 7$$

$$\boxed{} + \boxed{12} = 13$$

$$\boxed{} + \boxed{2} = 8$$

$$\boxed{} + \boxed{1} = 7$$

$$\boxed{2} + \boxed{} = 5$$

$$\boxed{} + \boxed{16} = 20$$

$$\boxed{} + \boxed{2} = 7$$

$$\boxed{3} + \boxed{} = 7$$

$$\boxed{11} + \boxed{} = 12$$

$$\boxed{} + \boxed{5} = 12$$

$$\boxed{15} + \boxed{} = 18$$

$$\boxed{1} + \boxed{} = 6$$

$$\boxed{6} + \boxed{} = 17$$

$$\boxed{} + \boxed{7} = 12$$

$$\boxed{} + \boxed{3} = 5$$

$$\boxed{16} + \boxed{} = 19$$