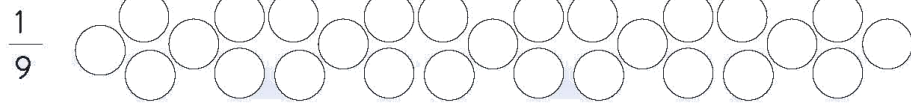
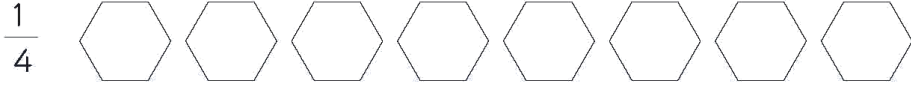



İnteraktif Eğitim  
Kesirler -3-

1. Aşağıdaki çoklukların, belirtilen kesrin birimi kadarını boyayınız.

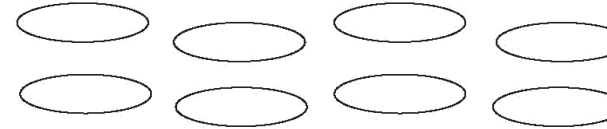


2. Çoklukların belirtilen kesrin birimi kadarını işlem yaparak bulunuz.


Sonuçlara göre şekilleri boyayınız.



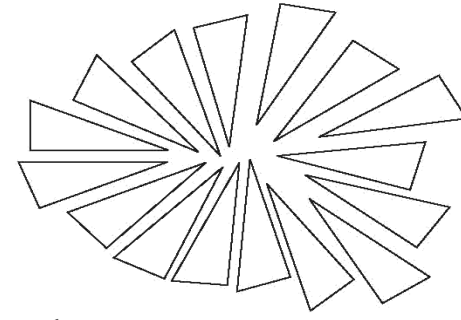
4'ün  $\frac{1}{2}$  'i =



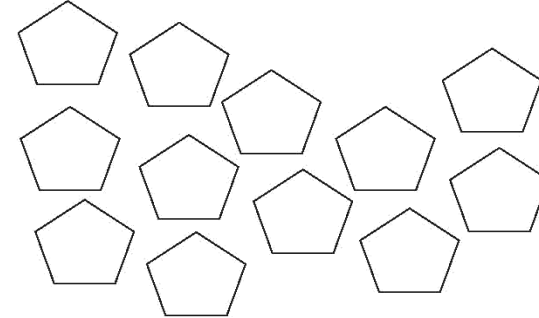
8'in  $\frac{1}{4}$  'i =



10'un  $\frac{1}{5}$  'i =



16'nin  $\frac{1}{8}$  'i =

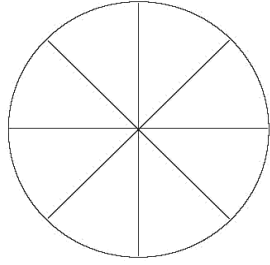
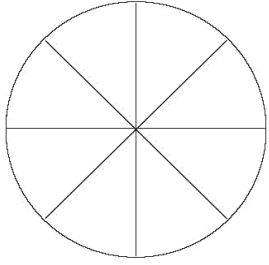
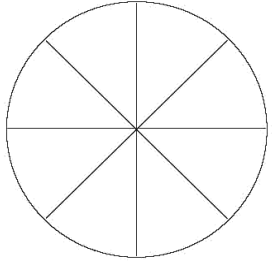


12'nin  $\frac{1}{3}$  'i =



## İnteraktif Eğitim

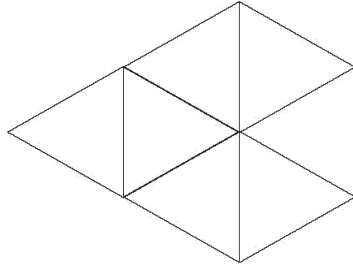
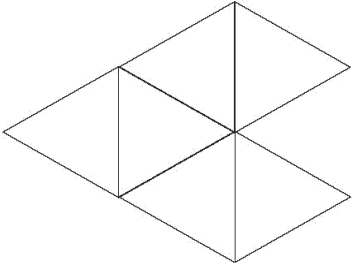
3. Bütünlerin belirtilen kesrin birimi kadarını işlem yaparak bulunuz.  
Sonuçlara göre şekilleri boyayınız.



$$8\text{'in } \frac{1}{4} \text{ i} = \boxed{\phantom{00}}$$

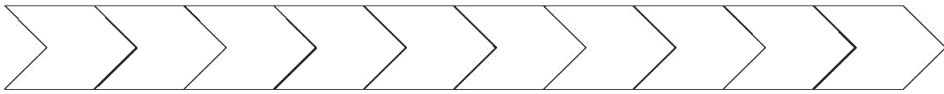
$$8\text{'in } \frac{1}{2} \text{ i} = \boxed{\phantom{00}}$$

$$8\text{'in } \frac{1}{8} \text{ i} = \boxed{\phantom{00}}$$

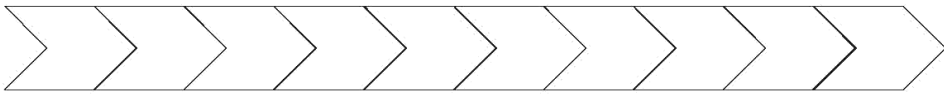


$$6\text{'nın } \frac{1}{3} \text{ i} = \boxed{\phantom{00}}$$

$$6\text{'nın } \frac{1}{6} \text{ i} = \boxed{\phantom{00}}$$



$$10\text{'un } \frac{1}{5} \text{ i} = \boxed{\phantom{00}}$$



$$10\text{'un } \frac{1}{2} \text{ i} = \boxed{\phantom{00}}$$

4. Aşağıdaki çoklukların belirtilen kesir kadarını bularak yazınız.

