


1. Şekillerin ifade ettiği kesirleri ve okunuşlarını iki şekilde de yazalım.




$$\text{Kesir : } \frac{2}{3}$$

1. Okunuşu:.....  
2. Okunuşu:.....



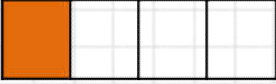
$$\text{Kesir : } \frac{1}{3}$$

1. Okunuşu:.....  
2. Okunuşu:.....



$$\text{Kesir : } \frac{1}{2}$$

1. Okunuşu:.....  
2. Okunuşu:.....




$$\text{Kesir : } \frac{1}{4}$$

1. Okunuşu:.....  
2. Okunuşu:.....




$$\text{Kesir : } \frac{3}{4}$$

1. Okunuşu:.....  
2. Okunuşu:.....



$$\text{Kesir : } \frac{2}{4}$$

1. Okunuşu:.....  
2. Okunuşu:.....



$$\text{Kesir : } \frac{2}{5}$$

1. Okunuşu:.....  
2. Okunuşu:.....



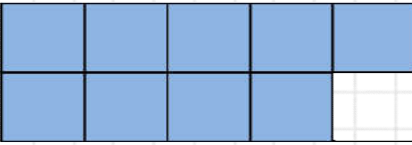
$$\text{Kesir : } \frac{4}{5}$$

1. Okunuşu:.....  
2. Okunuşu:.....



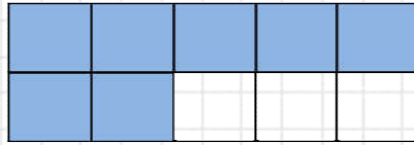
$$\text{Kesir : } \frac{3}{5}$$

1. Okunuşu:.....  
2. Okunuşu:.....



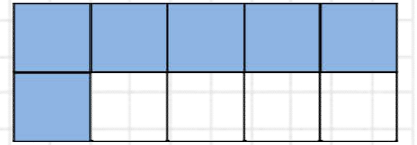
$$\text{Kesir : } \frac{8}{10}$$

1. Okunuşu:.....  
2. Okunuşu:.....



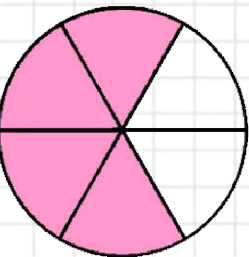
$$\text{Kesir : } \frac{4}{10}$$

1. Okunuşu:.....  
2. Okunuşu:.....



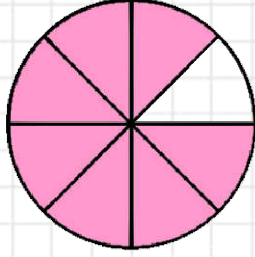
$$\text{Kesir : } \frac{5}{10}$$

1. Okunuşu:.....  
2. Okunuşu:.....



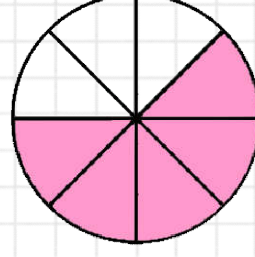
$$\text{Kesir : } \frac{4}{6}$$

1. Okunuşu:.....  
2. Okunuşu:.....



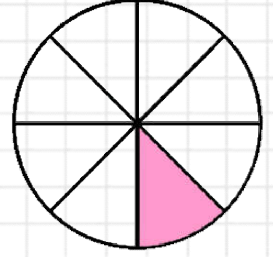
$$\text{Kesir : } \frac{5}{6}$$

1. Okunuşu:.....  
2. Okunuşu:.....



$$\text{Kesir : } \frac{3}{6}$$

1. Okunuşu:.....  
2. Okunuşu:.....




$$\text{Kesir : } \frac{1}{6}$$

1. Okunuşu:.....  
2. Okunuşu:.....

2. Aşağıdaki kesirleri karelerden yararlanarak şekil üzerinde boyayarak gösterelim.

$$\frac{2}{3}$$




$$\frac{1}{2}$$




$$\frac{1}{3}$$




$$\frac{2}{4}$$




$$\frac{2}{5}$$




$$\frac{1}{4}$$




$$\frac{3}{4}$$




$$\frac{3}{5}$$




$$\frac{1}{5}$$



$$\frac{2}{6}$$




$$\frac{5}{6}$$



$$\frac{3}{6}$$



$$\frac{4}{6}$$




$$\frac{2}{8}$$




$$\frac{5}{8}$$



$$\frac{3}{8}$$



$$\frac{7}{8}$$



$$\frac{1}{8}$$

