

1.  Yandaki şekil hangi devre elemanıdır?

- A) Ampul  
B) Anahtar  
C) Pil  
D) Kablo

2.  Yandaki şekil hangi devre elemanıdır?

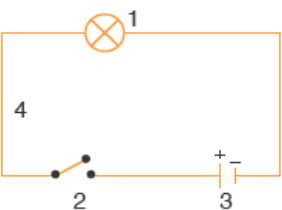
- A) Ampul  
B) Anahtar  
C) Pil  
D) Kablo

3.  Yandaki şekil hangi devre elemanıdır?

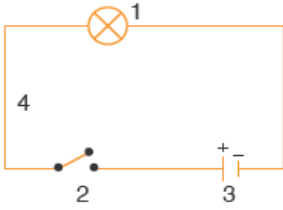
- A) Ampul  
B) Anahtar  
C) Pil  
D) Kablo

4.  Yandaki şekil hangi devre elemanıdır?

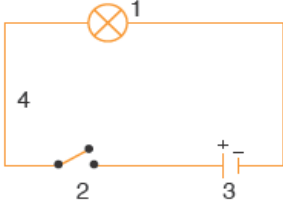
- A) Ampul  
B) Anahtar  
C) Pil  
D) Kablo

5.  Yandaki devrede 4 numaralı devre elemanı hangisidir?

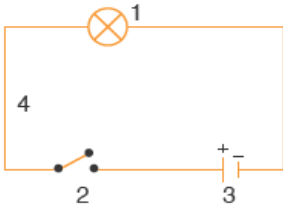
- A) Ampul  
B) Anahtar  
C) Pil  
D) Kablo

6.  Yandaki devrede 2 numaralı devre elemanı hangisidir?

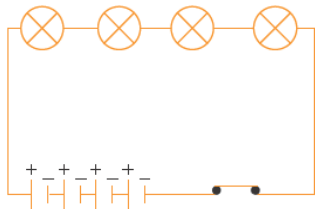
- A) Ampul  
B) Anahtar  
C) Pil  
D) Kablo

7.  Yandaki devrede 3 numaralı devre elemanı hangisidir?

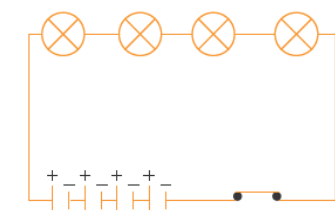
- A) Ampul  
B) Anahtar  
C) Pil  
D) Kablo

8.  Yandaki devrede 1 numaralı devre elemanı hangisidir?

- A) Ampul  
B) Anahtar  
C) Pil  
D) Kablo

9.  Yandaki elektrik devresinde kaç tane ampul vardır?

- A) 1  
B) 2  
C) 3  
D) 4

10.  Yandaki elektrik devresinde kaç tane pil vardır?

- A) 1  
B) 2  
C) 3  
D) 4