



1. Aşağıdaki örüntülerin kurallarını yazınız.

a.

9	15	21	27	33	39
---	----	----	----	----	----

 Kural :

b.

7	14	21	28	35	42
---	----	----	----	----	----

 Kural :

c.

33	29	25	21	17	13
----	----	----	----	----	----

 Kural :

d.

37	45	53	61	69	77
----	----	----	----	----	----

 Kural :

e.

45	42	39	36	33	30
----	----	----	----	----	----

 Kural :

f.

25	29	33	37	41	45
----	----	----	----	----	----

 Kural :

g.

13	23	33	43	53	63
----	----	----	----	----	----

 Kural :

h.

67	60	53	46	39	32
----	----	----	----	----	----

 Kural :

i.

91	82	73	64	55	46
----	----	----	----	----	----

 Kural :

i.

44	50	56	62	68	74
----	----	----	----	----	----

 Kural :

j.

83	79	75	71	67	63
----	----	----	----	----	----

 Kural :

2. Verilen örüntüleri 4 adım ilerletelim.

a.

12	15	20	23	28	31
----	----	----	----	----	----	-----	-----	-----	-----

b.

11	16	14	19	17	22
----	----	----	----	----	----	-----	-----	-----	-----

c.

33	28	30	25	27	22
----	----	----	----	----	----	-----	-----	-----	-----

d.

64	54	59	49	54	44
----	----	----	----	----	----	-----	-----	-----	-----

e.

45	42	40	37	35	32
----	----	----	----	----	----	-----	-----	-----	-----

f.

25	29	31	35	37	41
----	----	----	----	----	----	-----	-----	-----	-----

g.

36	41	39	44	42	47
----	----	----	----	----	----	-----	-----	-----	-----

h.

67	62	65	60	63	58
----	----	----	----	----	----	-----	-----	-----	-----

i.

91	82	78	69	65	56
----	----	----	----	----	----	-----	-----	-----	-----

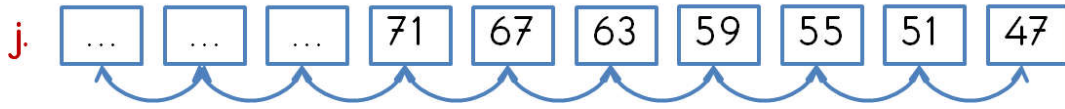
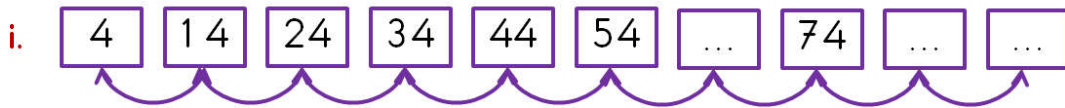
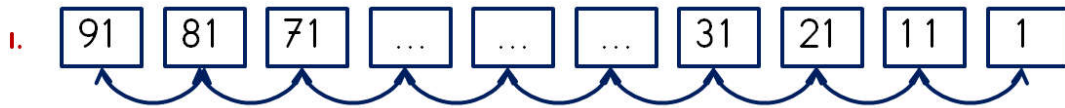
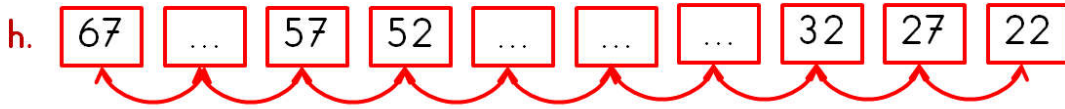
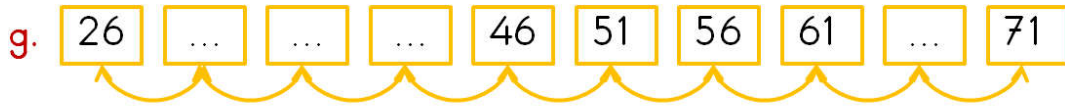
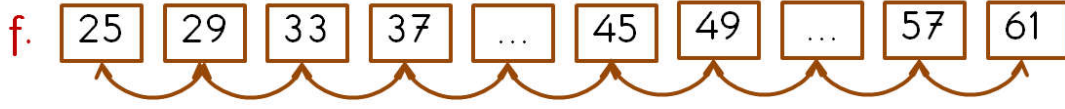

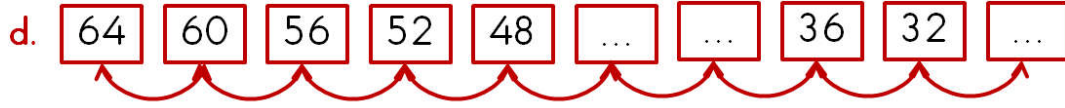
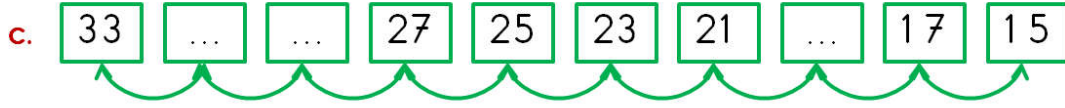
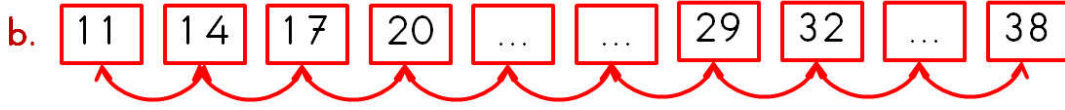
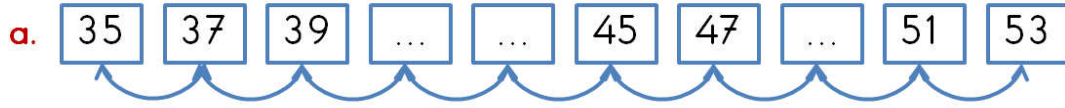
i.

44	47	52	55	60	63
----	----	----	----	----	----	-----	-----	-----	-----

j.

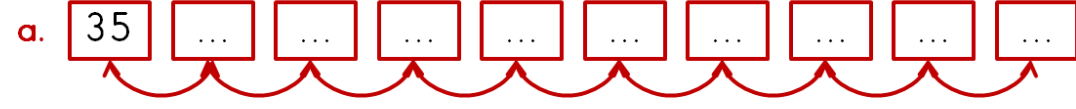
83	75	78	70	73	65
----	----	----	----	----	----	-----	-----	-----	-----

3. Verilen örüntülerde verilmeyen sayıları yazalım.

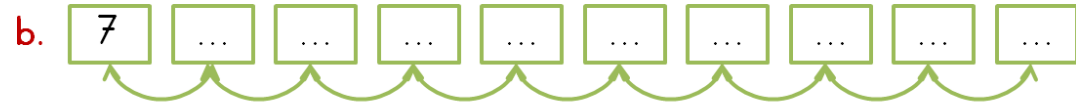


4. Verilen sayıdan başlayarak belirtilen kurala göre örüntü oluşturalım.

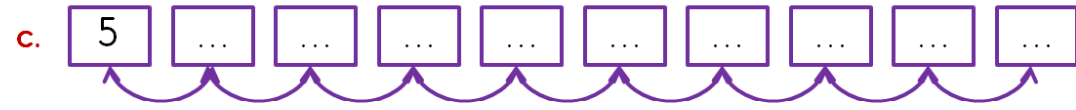
Kural : 7 fazlasının 3 eksiği



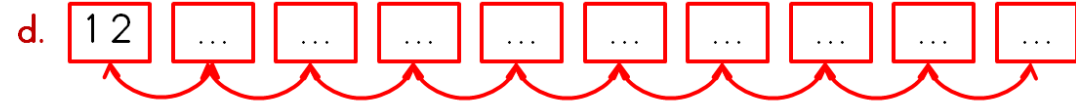
Kural : 2 katının 3 fazlası



Kural : 3 katının 10 fazlası



Kural : 4 katı



Kural : 9 eksiğinin 5 fazlası



Kural : 7 eksiğinin 2 fazlası

