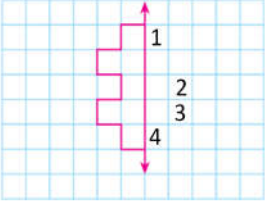
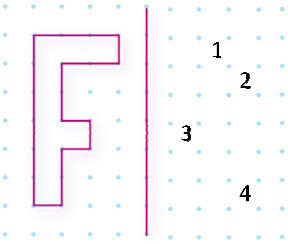


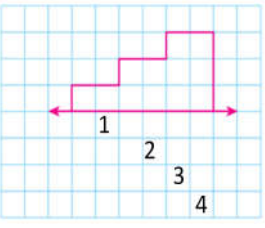
1. Yandaki şeklin simetriğini boyarsak hangi kareyi boyamayız?  
A) 1 B) 2  
C) 3 D) 4



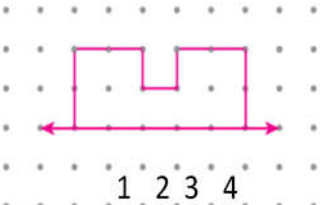
2. Yandaki şeklin simetriğini boyarsak hangi kareyi boyamayız?  
A) 1 B) 2  
C) 3 D) 4



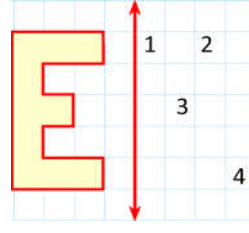
3. Yandaki şeklin simetriğini çizerken hangi rakamın olduğu yeri kullanmayız?  
A) 1 B) 2  
C) 3 D) 4



4. Yandaki şeklin simetriğini boyarsak hangi kareyi boyamayız?  
A) 1 B) 2  
C) 3 D) 4



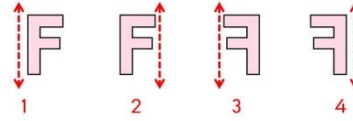
5. Yandaki şeklin simetriğini boyarsak hangi rakamı boyamayız?  
A) 1 B) 2  
C) 3 D) 4



6. Yandaki şeklin simetriğini boyarsak hangi rakamı boyamayız?  
A) 1 B) 2 C) 3 D) 4



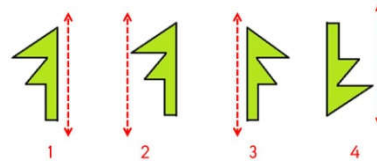
7. Yandaki şeklin simetriği aşağıdakilerden hangisidir?



- A) 1 B) 4 C) 3 D) 2



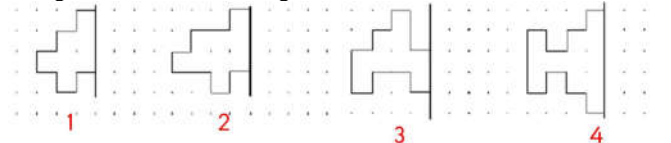
8. Yandaki şeklin simetriği aşağıdakilerden hangisidir?



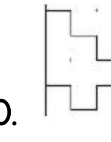
- A) 3 B) 2 C) 1 D) 4



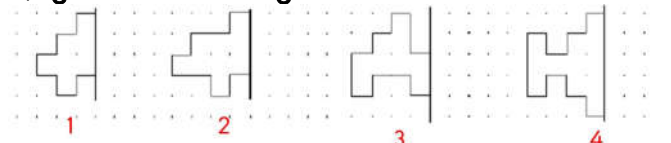
9. Yandaki şeklin simetriği aşağıdakilerden hangisidir?



- A) 3 B) 2 C) 1 D) 4



10. Yandaki şeklin simetriği aşağıdakilerden hangisidir?



- A) 1 B) 2 C) 3 D) 4