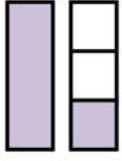


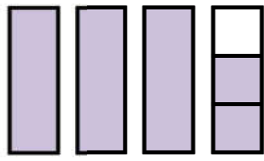


1. Şekillerin ifade ettiği kesirleri ve okunuşlarını iki şekilde de yazalım.




Kesir : $\frac{3}{4}$

1. Okunuşu:.....
2. Okunuşu:.....




Kesir : $\frac{7}{8}$

1. Okunuşu:.....
2. Okunuşu:.....



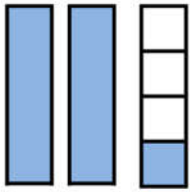
Kesir : $\frac{5}{6}$

1. Okunuşu:.....
2. Okunuşu:.....



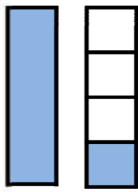
Kesir : $\frac{5}{6}$

1. Okunuşu:.....
2. Okunuşu:.....



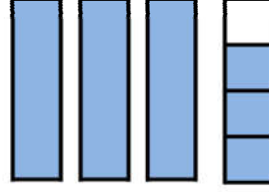
Kesir : $\frac{7}{9}$

1. Okunuşu:.....
2. Okunuşu:.....



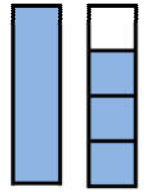
Kesir : $\frac{4}{6}$

1. Okunuşu:.....
2. Okunuşu:.....



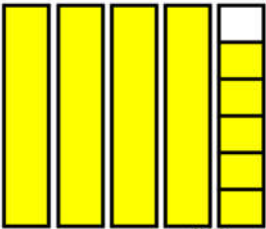
Kesir : $\frac{10}{12}$

1. Okunuşu:.....
2. Okunuşu:.....



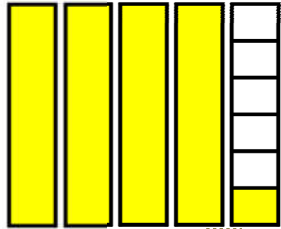
Kesir : $\frac{5}{6}$

1. Okunuşu:.....
2. Okunuşu:.....



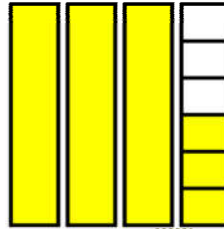
Kesir : $\frac{7}{10}$

1. Okunuşu:.....
2. Okunuşu:.....



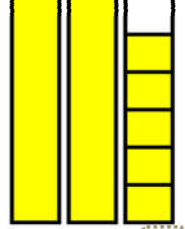
Kesir : $\frac{9}{10}$

1. Okunuşu:.....
2. Okunuşu:.....



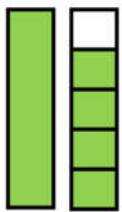
Kesir : $\frac{10}{12}$

1. Okunuşu:.....
2. Okunuşu:.....




Kesir : $\frac{7}{10}$

1. Okunuşu:.....
2. Okunuşu:.....



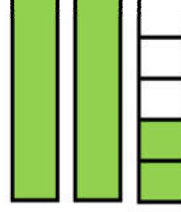
Kesir : $\frac{7}{8}$

1. Okunuşu:.....
2. Okunuşu:.....



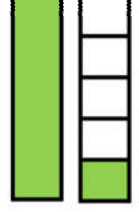
Kesir : $\frac{15}{16}$

1. Okunuşu:.....
2. Okunuşu:.....



Kesir : $\frac{8}{9}$

1. Okunuşu:.....
2. Okunuşu:.....



Kesir : $\frac{5}{8}$

1. Okunuşu:.....
2. Okunuşu:.....

2. Aşağıdaki kesirleri karelerden yararlanarak çizerek şekil üzerinde gösterelim.

$3\frac{3}{5}$

$1\frac{1}{2}$

$3\frac{1}{2}$

$3\frac{1}{3}$

$2\frac{2}{3}$

$2\frac{2}{4}$

$1\frac{1}{4}$

$4\frac{3}{4}$

$1\frac{3}{6}$

$3\frac{1}{6}$

$2\frac{5}{6}$

$4\frac{4}{6}$

$2\frac{4}{5}$

$3\frac{1}{5}$

$5\frac{2}{5}$

$3\frac{3}{5}$