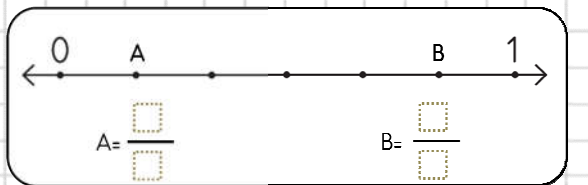


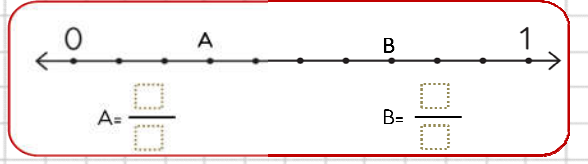
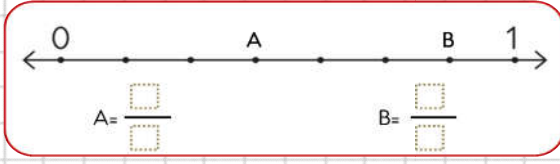
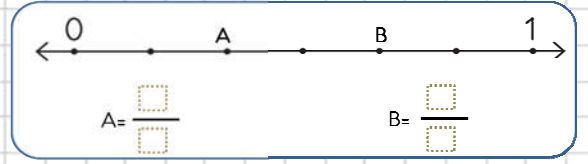
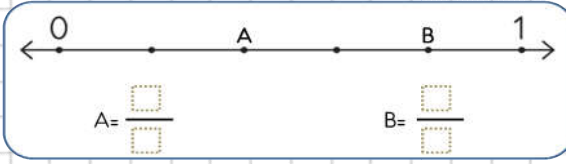
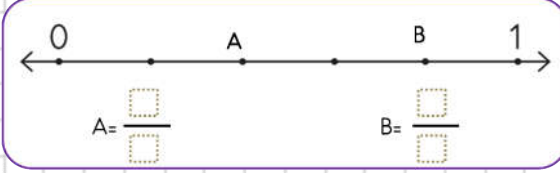
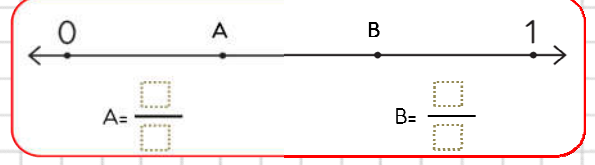





1. Aşağıdaki sayı doğrularında harflerle belirtilen kesirleri yazalım.

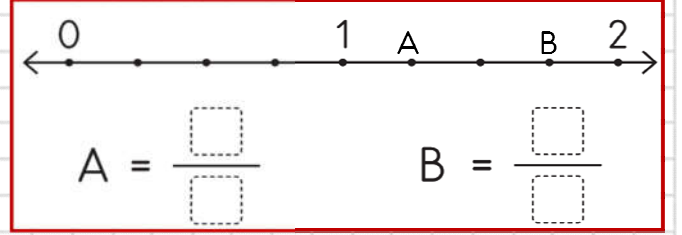
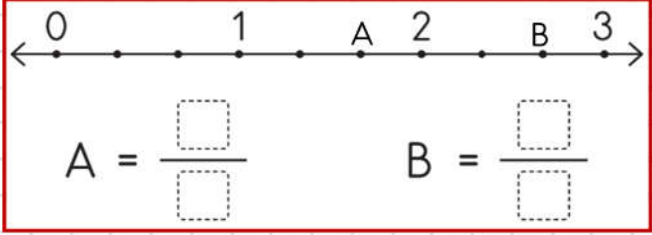
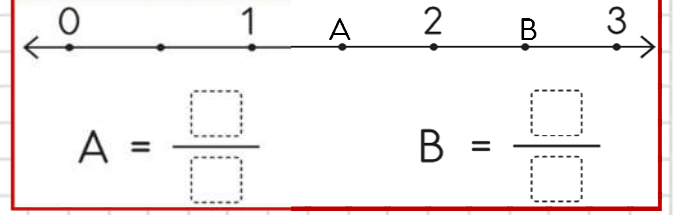
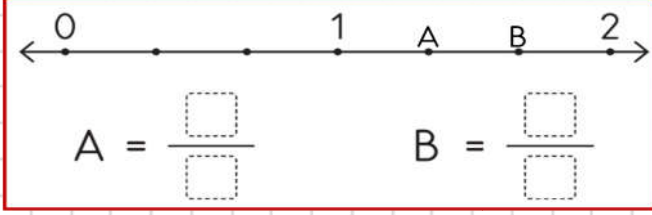


2. Aşağıda verilen kesirleri sayı doğrusunda gösterelim.





3. Aşağıdaki sayı doğrusunda belirtilen noktaları bileşik kesir olarak yazınız.



4. Aşağıdaki sayı doğrusunda belirtilen noktaları tamsayılı kesir olarak yazınız.

0 1 A B 2

A = $\frac{\square}{\square}$ B = $\frac{\square}{\square}$

0 1 2 A B 3

A = $\frac{\square}{\square}$ B = $\frac{\square}{\square}$

0 1 2 A 3 B

A = $\frac{\square}{\square}$ B = $\frac{\square}{\square}$

0 1 A B 2

A = $\frac{\square}{\square}$ B = $\frac{\square}{\square}$

0 1 A B 2

A = $\frac{\square}{\square}$ B = $\frac{\square}{\square}$

0 1 A B 2

A = $\frac{\square}{\square}$ B = $\frac{\square}{\square}$

0 1 A 2 B 3

A = $\frac{\square}{\square}$ B = $\frac{\square}{\square}$

0 1 2 A B 3

A = $\frac{\square}{\square}$ B = $\frac{\square}{\square}$