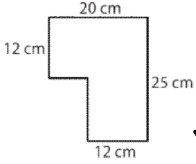


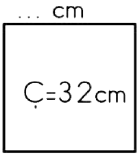
1. Yukarıda verilen karenin çevresi kaç birimdir?

- A) 12 br B) 18 br  
C) 24 br D) 36 br



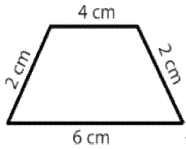
2. Yukarıda verilen şeklin çevresi kaç cm'dir?

- A) 45 cm B) 44 cm  
C) 69 cm D) 90 cm



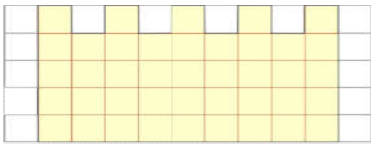
3. Yukarıdaki karenin bir kenarı kaç cm'dir?

- A) 8 cm B) 16 cm  
C) 12 cm D) 6 cm



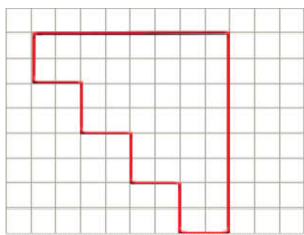
4. Şeklin çevresi kaç cm'dir?

- A) 14 cm B) 24 cm  
C) 18 cm D) 12 cm



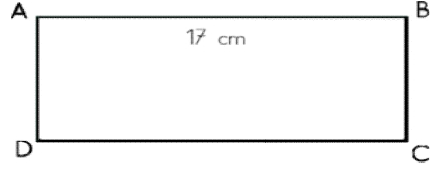
5. Yukarıdaki şeklin çevresi kaç birimdir?

- A) 32 br B) 42 br  
C) 36 br D) 27 br



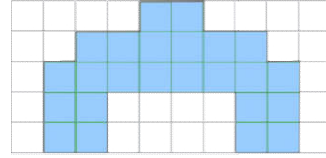
6. Yukarıdaki şeklin çevresi kaç birimdir?

- A) 16 br B) 24 br  
C) 36 br D) 32 br



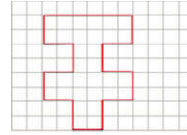
7. Yukarıdaki dikdörtgenin çevresi 50 cm ise kısa kenarı kaç cm'dir?

- A) 16 cm B) 10 cm  
C) 13 cm D) 8 cm



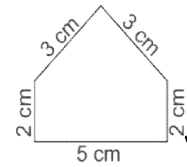
8. Şeklin çevresi kaç birimdir?

- A) 32 br B) 36 br  
C) 30 br D) 28 br




9. Yukarıdaki şeklin çevresi kaç birimdir?

- A) 48 br B) 36 br  
C) 24 br D) 26 br



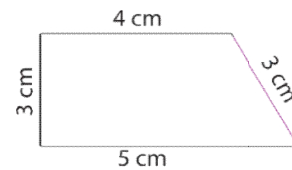
10. Verilen şeklin çevresi kaç cm'dir?

- A) 12 cm B) 10 cm  
C) 24 cm D) 15 cm



11. Yukarıda verilen dikdörtgenin çevresi kaç birimdir?

- A) 18 br B) 10 br  
C) 20 br D) 24 br



12. Yukarıda verilen şeklin çevresi kaç cm'dir?

- A) 11 cm B) 13 cm  
C) 15 cm D) 9 cm