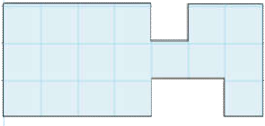


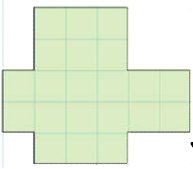
1. Yanda verilen şeklin alanı kaç birim karedir?

- A) 17 br<sup>2</sup>                      B) 18 br<sup>2</sup>  
C) 19 br<sup>2</sup>                      D) 20 br<sup>2</sup>



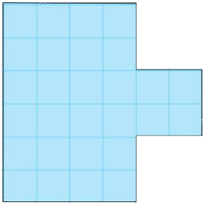
2. Verilen şeklin alanı kaç birim karedir?

- A) 17 br<sup>2</sup>                      B) 18 br<sup>2</sup>  
C) 22 br<sup>2</sup>                      D) 24 br<sup>2</sup>



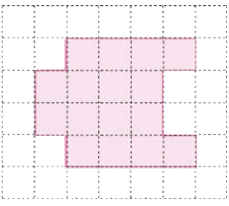
3. Yandaki şeklin alanı kaç birim karedir?

- A) 23 br<sup>2</sup>                      B) 22 br<sup>2</sup>  
C) 21 br<sup>2</sup>                      D) 20 br<sup>2</sup>



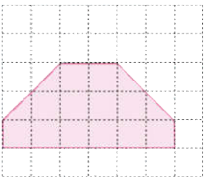
4. Verilen şeklin alanı kaç birim karedir?

- A) 24 br<sup>2</sup>                      B) 25 br<sup>2</sup>  
C) 26 br<sup>2</sup>                      D) 28



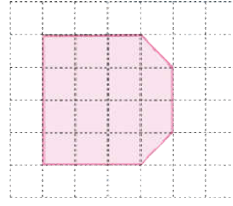
5. Yandaki şeklin alanı kaç birim karedir?

- A) 16 br<sup>2</sup>                      B) 18 br<sup>2</sup>  
C) 20 br<sup>2</sup>                      D) 22 br<sup>2</sup>



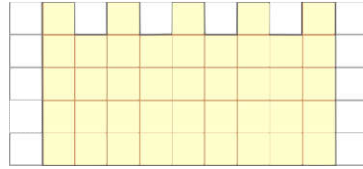
6. Verilen şeklin alanı kaç birim karedir?

- A) 14 br<sup>2</sup>                      B) 16 br<sup>2</sup>  
C) 18 br<sup>2</sup>                      D) 20 br<sup>2</sup>



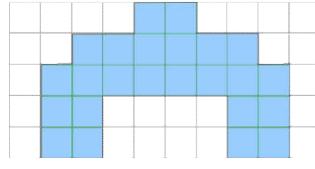
7. Yanda verilen şeklin alanı kaç birim karedir?

- A) 14 br<sup>2</sup>                      B) 15  
C) 16 br<sup>2</sup>                      D) 17 br<sup>2</sup>



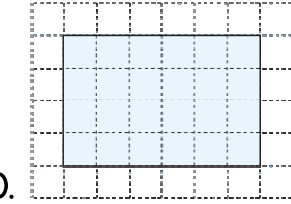
8. Verilen şeklin alanı kaç birim karedir?

- A) 35 br<sup>2</sup>                      B) 41 br<sup>2</sup>  
C) 36 br<sup>2</sup>                      D) 42 br<sup>2</sup>



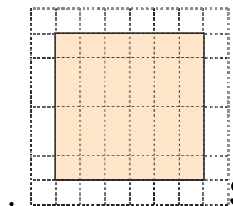
9. Yanda verilen şeklin alanı kaç birim karedir?

- A) 30 br<sup>2</sup>                      B) 28 br<sup>2</sup>  
C) 24 br<sup>2</sup>                      D) 22 br<sup>2</sup>



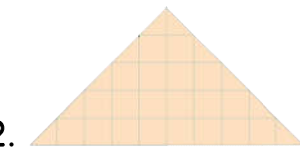
10. Verilen şeklin alanı kaç birim karedir?

- A) 18 br<sup>2</sup>                      B) 20 br<sup>2</sup>  
C) 24 br<sup>2</sup>                      D) 26 br<sup>2</sup>



11. Şekildeki karenin alanı kaç birim karedir?

- A) 24 br<sup>2</sup>                      B) 32 br<sup>2</sup>  
C) 34 br<sup>2</sup>                      D) 36 br<sup>2</sup>



12. Yanda verilen şeklin alanı kaç birim karedir?

- A) 19 br<sup>2</sup>                      B) 20 br<sup>2</sup>  
C) 23 br<sup>2</sup>                      D) 25 br<sup>2</sup>