




1. Aşağıdaki şekillere ait kesirleri yazarak büyükten küçüğe doğru sıralayınız.



.....  
-----

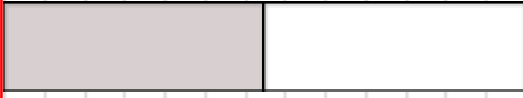


.....  
-----



.....  
-----

$$\frac{7}{8} > \frac{4}{8} > \frac{3}{8}$$



.....  
-----



.....  
-----

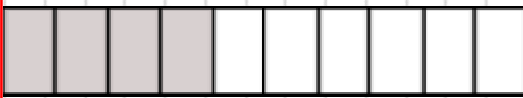


.....  
-----


$$\frac{4}{5} > \frac{1}{2} > \frac{1}{3}$$



.....  
-----




.....  
-----



.....  
-----

$$\frac{7}{8} > \frac{5}{8} > \frac{3}{8}$$


2. Aşağıdaki şekillere ait kesirleri yazarak küçükten büyüğe doğru sıralayınız.



 $\frac{\dots}{\dots}$ 

 $\frac{\dots}{\dots}$ 



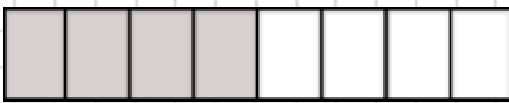
 $\frac{\dots}{\dots}$ 

$$\frac{\dots}{\dots} < \frac{\dots}{\dots} < \frac{\dots}{\dots}$$


 $\frac{\dots}{\dots}$ 

 $\frac{\dots}{\dots}$ 

 $\frac{\dots}{\dots}$ 

$$\frac{\dots}{\dots} < \frac{\dots}{\dots} < \frac{\dots}{\dots}$$


 $\frac{\dots}{\dots}$ 

 $\frac{\dots}{\dots}$ 

 $\frac{\dots}{\dots}$ 

$$\frac{\dots}{\dots} < \frac{\dots}{\dots} < \frac{\dots}{\dots}$$

3. Aşağıdaki şekillere ait kesirleri yazarak büyükten küçüğe doğru sıralayınız.



.....  
-----  
.....




.....  
-----  
.....



.....  
-----  
.....

..... > ..... > .....



.....  
-----  
.....

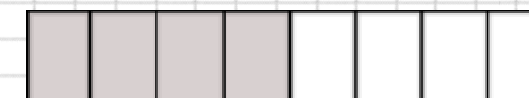


.....  
-----  
.....




.....  
-----  
.....

..... > ..... > .....



.....  
-----  
.....



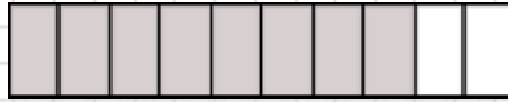
.....  
-----  
.....



.....  
-----  
.....

..... > ..... > .....

4. Aşağıdaki şekillere ait kesirleri yazarak küçükten büyüğe doğru sıralayınız.



.....  
\_\_\_\_\_



.....  
\_\_\_\_\_



.....  
\_\_\_\_\_

.....  
\_\_\_\_\_

.....  
\_\_\_\_\_

$$\frac{10}{10} < \frac{7}{10} < \frac{3}{10}$$



.....  
\_\_\_\_\_




.....  
\_\_\_\_\_




.....  
\_\_\_\_\_

.....  
\_\_\_\_\_

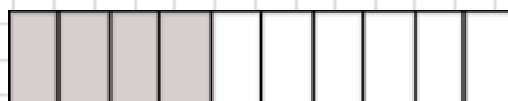
$$\frac{10}{10} < \frac{4}{10} < \frac{2}{10}$$



.....  
\_\_\_\_\_



.....  
\_\_\_\_\_



.....  
\_\_\_\_\_

.....  
\_\_\_\_\_

$$\frac{10}{10} < \frac{6}{10} < \frac{4}{10}$$