



1.  Yandaki şekil hangi devre elemanıdır?

- A) Ampul
- B) Anahtar
- C) Pil
- D) Kablo

2.  Yandaki şekil hangi devre elemanıdır?

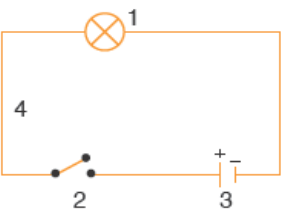
- A) Ampul
- B) Anahtar
- C) Pil
- D) Kablo

3.  Yandaki şekil hangi devre elemanıdır?

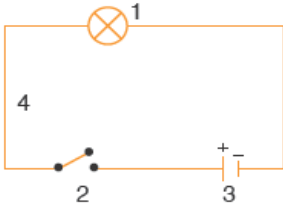
- A) Ampul
- B) Anahtar
- C) Pil
- D) Kablo

4.  Yandaki şekil hangi devre elemanıdır?

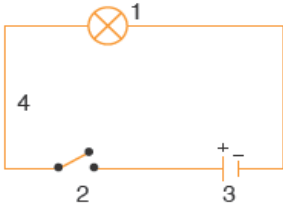
- A) Ampul
- B) Anahtar
- C) Pil
- D) Kablo

5.  Yandaki devrede 4 numaralı devre elemanı hangisidir?

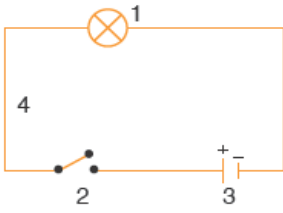
- A) Ampul
- B) Anahtar
- C) Pil
- D) Kablo

6.  Yandaki devrede 2 numaralı devre elemanı hangisidir?

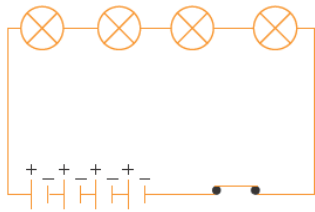
- A) Ampul
- B) Anahtar
- C) Pil
- D) Kablo

7.  Yandaki devrede 3 numaralı devre elemanı hangisidir?

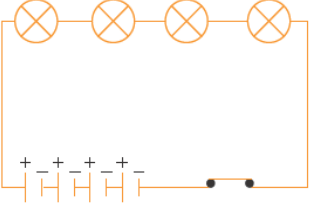
- A) Ampul
- B) Anahtar
- C) Pil
- D) Kablo

8.  Yandaki devrede 1 numaralı devre elemanı hangisidir?

- A) Ampul
- B) Anahtar
- C) Pil
- D) Kablo

9.  Yandaki elektrik devresinde kaç tane ampul vardır?

- A) 1
- B) 2
- C) 3
- D) 4



10. Yandaki elektrik devresinde kaç tane pil vardır?

- A) 1
- B) 2
- C) 3
- D) 4

Adı :.....

Notu:

| | | | | |
|----|---|---|---|---|
| 1 | A | B | C | D |
| 2 | A | B | C | D |
| 3 | A | B | C | D |
| 4 | A | B | C | D |
| 5 | A | B | C | D |
| 6 | A | B | C | D |
| 7 | A | B | C | D |
| 8 | A | B | C | D |
| 9 | A | B | C | D |
| 10 | A | B | C | D |
| 11 | A | B | C | D |
| 12 | A | B | C | D |